

Atomic Energy Central School-2, Mumbai

Periodic Test-1 (July 2024)

Subject: EVS                      Marks: 40                      Marks Obtained: \_\_\_\_\_

Student's Name: \_\_\_\_\_

Class/ Sec: 4 - \_\_\_\_\_ Roll No.: \_\_\_\_\_ Date of Examination: \_\_\_\_\_

Invigilator's Sign: \_\_\_\_\_ Examiner's Sign: \_\_\_\_\_

---

**I) Choose the correct answer and fill in the blanks. (1/2 X 5 = 2 ½ M)**

- i) Animals that do not have \_\_\_\_\_ lay eggs.  
( ears , eyes )
- ii) An adult elephant can eat more than \_\_\_\_\_ kilograms of leaves and twigs.  
( 200 , 100 )
- iii) Cement bridge is made up of bricks, cement, sand and \_\_\_\_\_ rods.  
( bamboo, iron )
- iv) Khejadli village is near \_\_\_\_\_ in Rajasthan.  
( Jaipur , Jodhpur )
- v) The \_\_\_\_\_ bees are very important for the beehive.  
( worker , soldier )

**II) Give 2 examples of each. ( 1 X 3 = 3 M )**

- a) Animals that have hair on their body.  
\_\_\_\_\_ , \_\_\_\_\_
- b) Animals with ears like leaves.  
\_\_\_\_\_ , \_\_\_\_\_
- c) Animals that live in herd.  
\_\_\_\_\_ , \_\_\_\_\_

**III) Circle the odd one out. ( 1 X 3 = 3 M )**

- i) Termites , wasps , egret , honeybees
- ii) Anita , Amrita , Khejadli , Khejadi

iii) frog , pig , snake , sparrow

**IV) Match the correct answer and write below.**

**(1/2 X 5 = 2 1/2 M)**

	<b>A</b>		<b>B</b>
1	An extinct animal	a	Leader of the herd
2	People of Khejadli village	b	Bullock cart
3	Right of free and compulsory education	c	Dinosaur
4	Village in the plains	d	Bishnois
5	Oldest female elephant	e	RTE-2009

1. \_\_\_\_\_ 2. \_\_\_\_\_ 3. \_\_\_\_\_ 4. \_\_\_\_\_ 5. \_\_\_\_\_

**V) Give reasons.**

**( 2 X 2 = 4 M )**

i) In snowy area children hold hands and walk to school.

---

---

---

---

ii) The village elders used to remark “Agar perh hain to hum hain”

---

---

---

---

**VI) State whether the following statements are True or False. (1 X 3 = 3 M)**

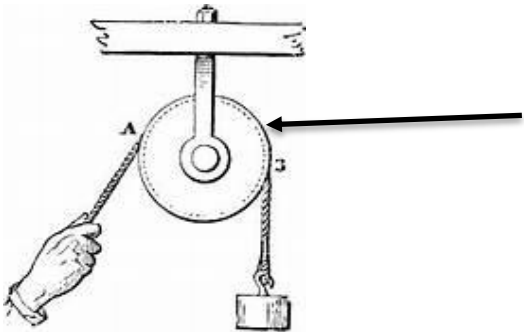

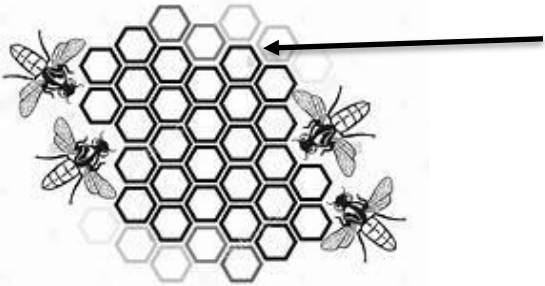
a) The pattern on animals' body is mainly due to the hair on its skin. \_\_\_\_\_

b) In Assam children use bamboo bridge to reach school- \_\_\_\_\_

c) An elephant herd has mainly male elephants- \_\_\_\_\_

**VII) Identify the pictures and write the names.**

**(1 X 3 = 3 M)**

	<p>_____</p>
	<p>_____</p>
	<p>_____</p>



**X) Answer the following questions.**

**( 2 X 3 = 6 M )**

1) What are mammals? Give 2 examples.

---

---

---

2) Write two lines on elephant herd.

---

---

3) Write the role of the following bees in the beehive.

i) Queen bee: \_\_\_\_\_

---

ii) Worker bee: \_\_\_\_\_

---

**XI) Who am I ?**

**( 1 X 2 = 2 M )**

a) I am a small wooden boat used  
in some parts of Kerala - \_\_\_\_\_



b) You see mee in circus jumping and  
dancing through rings of fire - \_\_\_\_\_



**XII) Mark the following states on the map of India.**

**( 1 X 3 = 3 M )**

Rajasthan

Bihar

Assam

