

ATOMIC ENERGY CENTRAL SCHOOL NO.2,MUMBAI

Periodic Test-1(2024-25)

CLASS 3

Subject:EVS **Marks:40** **Marks Obtained** _____

Name: _____ **Roll No:** _____ **Date:** _____

Invigilator's Sign: _____ **Examiner's Sign** _____

Q1.Choose the correct answer and fill in the blanks. (10M)

- a. _____ can hop. (snake/ lizard/ frog)
- b. _____ is a wild animal. (cow/ tiger/ goat)
- c. _____ is a creeper. (rose/ banana/ pumpkin)
- d.Tulsi plant is a _____. (tree/ herb/ shrub)
- e. _____ lives both in land and water. (zebra/ fox/ frog)
- f. _____ can be seen on the trunk. (monkey/ termites/ crow)
- g. _____ is a shrub. (mango/ neem/ mehendi)
- h. _____ is the main sources of water. (river/ pond/rain)
- i. _____ is the solid form of water.(water vapour, water, ice)
- j. _____ is an insects.(rabbit, butterfly, lion)

Q2.Name any two of the following. (2x5=10M)

a. Animals that crawl

b. Sources of water

c. Medicinal plants

d. Uses of water

e. Aquatic animals

Q3. Circle the odd one out. (2M)

a. Apple, banana, cauliflower, mango.

b. Lake, sea, river, mountain.

c. Rose, jasmine, brinjal, sunflower.

d. Car, bus, ship, bicycle

Q4. Answer the following questions. (8M)

a. What are trees? Give one example.

b. Write two activities you cannot do without water.

c. What are pet animals? Give one example.

d. Write the name of four rivers of India.

Q5. Match the following.

(3M)

1. Bark

1. Money plant

2. River

2. Monkey

3. Insect

3. Mint

4. Herb

4. Dog


5. Climber


5. Ganga

6. Banana


6. Spider

Q6. Identify the following and write their names. (2M)









Q7. Draw a plant and label its parts. (1M+2M=3M)

Q8. Draw and colour two containers used to store water. (2M)